



# Day 1

Practice reading this week's Sight Words.

again myself live warm  
pull may does first goes  
better

**\*\* Spelling Test on Friday\*\***

Practice reading this week's Sentences.

1. I want to read that book again.
  2. I made two cakes all by myself.
  3. We live near a small park.
  4. The apple pie was very warm.
  5. Don't pull too hard on the door.
  6. May I be the line leader this week?
  7. Does she know the way to our class?
  8. Were you the first one here?
  9. My aunt goes to work every day.
  10. She likes purple better than yellow.
- \*\* Read or listen to reading for 20 minutes\*\***

Read a book. Write 1. Title, 2. Author, 3. Illustrator, 4. Main Character

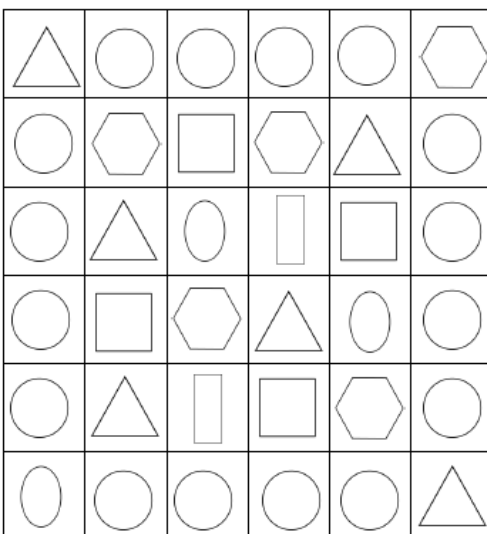
1	.....
2	.....
3	.....
4	.....

Solve the addition problems


1.  $12+3=$  \_\_\_\_\_
2.  $10+4=$  \_\_\_\_\_
3.  $7+5=$  \_\_\_\_\_
4.  $1+8=$  \_\_\_\_\_

Solve the subtraction problems

1.  $10-7=$  \_\_\_\_\_
2.  $8-4=$  \_\_\_\_\_
3.  $11-6=$  \_\_\_\_\_
4.  $9-5=$  \_\_\_\_\_



Color the circles.



Color the squares.

# Day 2

b e t t e r u p p a  
x t i e d u a u w g  
g o e s h m s l f a  
f f u o w y k l o i  
f i r s t s m a n n  
e o r e f e l l n i  
d o e s z l d j w v  
f r o m s f a l a e  
m a y o j x l k r b  
w y e s n t h e m q

Read & find  
the spelling  
words:

again  
myself  
live  
warm  
pull  
may  
does  
first  
goes  
better

Practice reading this week's Sentences.



1. I want to read that book again.
  2. I made two cakes all by myself.
  3. We live near a small park.
  4. The apple pie was very warm.
  5. Don't pull too hard on the door.
  6. May I be the line leader this week?
  7. Does she know the way to our class?
  8. Were you the first one here?
  9. My aunt goes to work every day.
  10. She likes purple better than yellow.
- \*\* Read or listen to reading for 20 minutes\*\***

**\*\* Spelling Test on Friday\*\***

What is one way you help the Earth for Earth Day this week?

Ben has 12 goldfish for snack. His friend has 5 goldfish. How many goldfish do they have in all?

Circle the objects that begin with the sw blend.



# Day 3

Practice reading this week's Sight Words.

again myself live warm  
 pull may does first goes  
 better

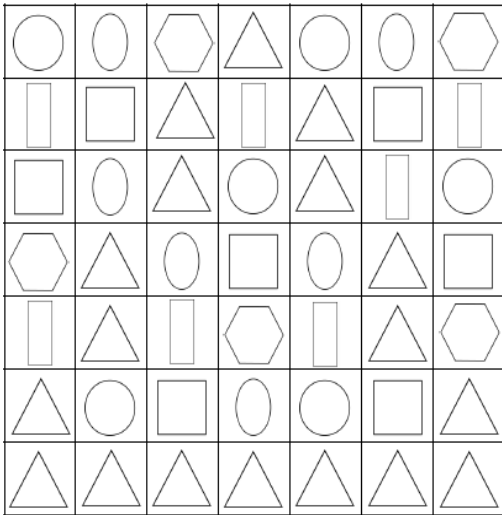
**\*\* Spelling Test on Friday\*\***

Practice reading this week's Sentences.

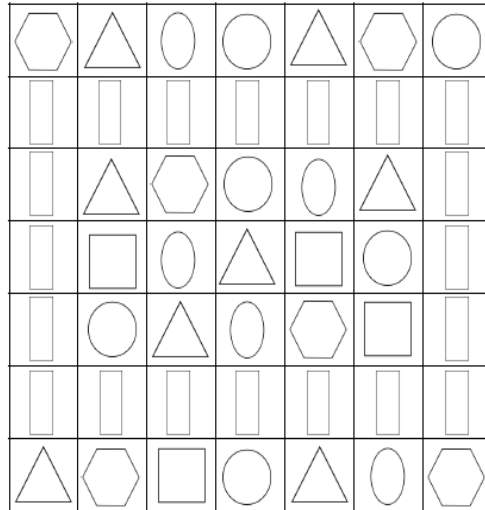
1. I want to read that book again.
  2. I made two cakes all by myself.
  3. We live near a small park.
  4. The apple pie was very warm.
  5. Don't pull too hard on the door.
  6. May I be the line leader this week?
  7. Does she know the way to our class?
  8. Were you the first one here?
  9. My aunt goes to work every day.
  10. She likes purple better than yellow.
- \*\* Read or listen to reading for 20 minutes\*\***

Jen made a necklace with 14 beads. 7 of the beads fell off. How many beads are left on the necklace?

Color the triangles.



Color the rectangles.



Use the letters to complete the -ap word family words.



c, sn, m, g

\_\_\_\_\_  
 - - - - -  
 ap



\_\_\_\_\_  
 - - - - -  
 ap



\_\_\_\_\_  
 - - - - -  
 ap



\_\_\_\_\_  
 - - - - -  
 ap

# Day 4

Practice reading this week's Sight Words.

again myself live warm  
pull may does first goes  
better

**\*\* Spelling Test on Friday\*\***

Practice reading this week's Sentences.

1. I want to read that book again.
  2. I made two cakes all by myself.
  3. We live near a small park.
  4. The apple pie was very warm.
  5. Don't pull too hard on the door.
  6. May I be the line leader this week?
  7. Does she know the way to our class?
  8. Were you the first one here?
  9. My aunt goes to work every day.
  10. She likes purple better than yellow.
- \*\* Read or listen to reading for 20 minutes\*\***

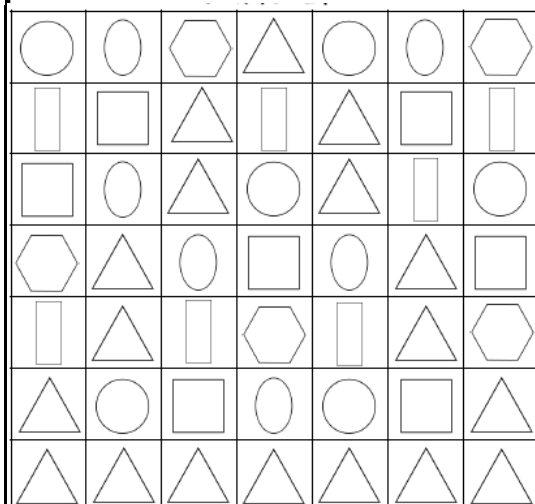
There are 10 cows on the farm. There are also 7 pigs on the farm. How many animals are on the farm in all?

Solve the addition problems

1.  $11+3=$  \_\_\_\_\_
2.  $7+10=$  \_\_\_\_\_
3.  $18+1=$  \_\_\_\_\_
4.  $0+4=$  \_\_\_\_\_

Solve the subtraction problems

1.  $11-5=$  \_\_\_\_\_
2.  $9-6=$  \_\_\_\_\_
3.  $15-6=$  \_\_\_\_\_
4.  $9-7=$  \_\_\_\_\_



Color the triangles.

Color the hexagons.

